




## Home Learning Activities

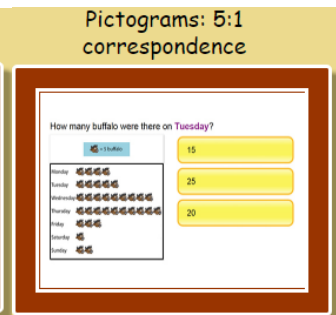
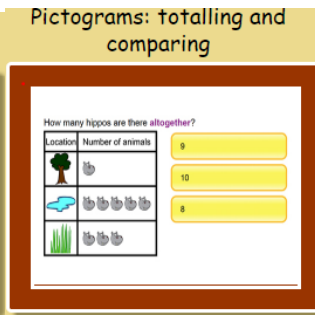
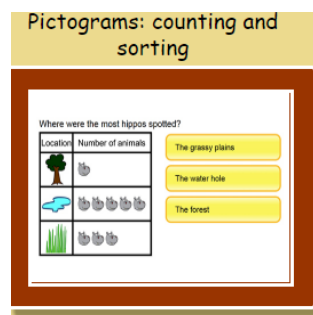
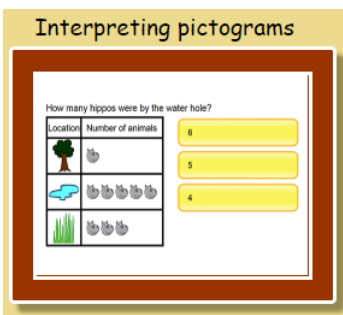
### Maths Year Two - Pictograms

Watch <https://www.bbc.co.uk/bitesize/clips/zg4d2hv> about the birds and the pictograms.

Then log into expresso as before using the school log in. Find the KS 1 maths section and the statistics section. Finally watch the following video on pictograms.



Complete each of the following activities in this order.





Complete these pictograms using the information collected in the table.

**Key**

Each represents 5 children.

Fruit	Number of children
apples	15
strawberry	25
Banana	20
grapes	5
orange	10

Fruit	Number of children
apples	
strawberry	
Banana	
grapes	
orange	

<p>Key</p> <p style="text-align: center;">  </p> <p>Each  represents 2 children.</p>
--

Ice Cream Flavour	Number of children
vanilla	<b>2</b>
strawberry	<b>10</b>
coffee	<b>8</b>
Salted caramel	<b>12</b>
Raspberry ripple	<b>20</b>



Ice Cream Flavour	Number of children
vanilla	
strawberry	
coffee	
Salted caramel	
Raspberry ripple	

**Challenge**

Choose your own data to collect in a table and then make your own pictogram to show the information collected.

Perhaps it could be the different amounts of coloured cars on your street, types of birds in your garden over one week, or information taken from this picture on 2D shapes.

