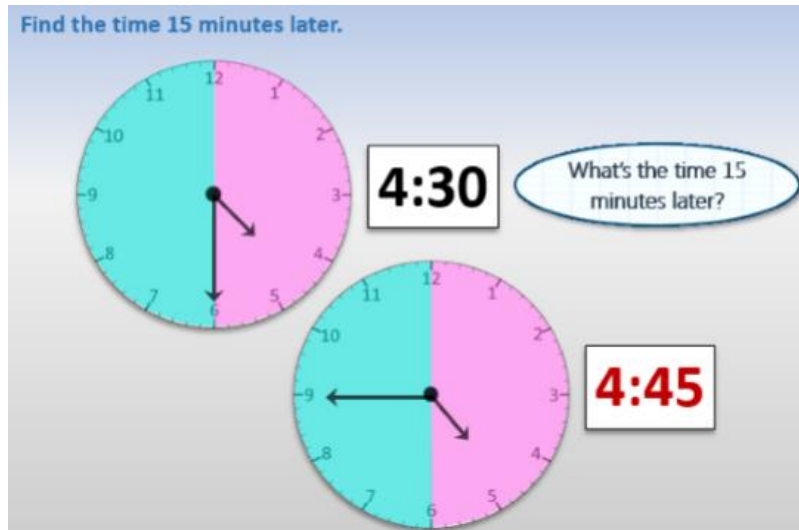


Home Learning Activities

Year 2





Maths Activity 2

Telling the time using digital and analogue clocks and adding fifteen minutes to any given time.



Talk to a grown up about how you know that fifteen minutes has passed between half past four and quarter to five shown on the analogue clock and also fifteen minutes between 4:30 and 4:45.

Look at a clock or watch in your home. Can you record the time now and in fifteen minutes time?

Time now	Fifteen minutes later
 	 

Explain with drawings or workings how you would solve these problems.

1. Sam and Billy left for school at 8:05 am. Their walk to school took 15 minutes. What time did they arrive at school?
2. The dinner took 15 minutes to cook and Dad finished cooking at 5:25pm. What time did he start?
3. The cartoon started at quarter to eight in the morning. It was fifteen minutes long. What time did the cartoon finish?

Write the time shown on the analogue clocks underneath as a digital time and then write the time that is 15 minutes later next to it. Don't forget to draw the hands on the clock to show what the time would be 15 minutes later too.

	+ 15 mins		+ 15 mins		+ 15 mins	
<hr style="border: 1px solid yellow;"/>						
	+ 15 mins		+ 15 mins		+ 15 mins	
<hr style="border: 1px solid yellow;"/>						
	+ 15 mins		+ 15 mins		+ 15 mins	
<hr style="border: 1px solid yellow;"/>						

Can you write your own adding 15 minutes word time problems for somebody else to answer?

Don't forget to send us pictures of your home learning tasks, we love seeing what you have been up to!