

Home Learning Activities

Year 2 Maths

Activity 1 - Time

Visit [bbc bitesize](https://www.bbc.co.uk/bitesize/topics/zkfyedm/articles/zcrmqtj) to watch the clips about digital and analogue clocks. Complete the online activities and games. <https://www.bbc.co.uk/bitesize/topics/zkfyedm/articles/zcrmqtj>

Recap telling the time with these slides.

Tell the time using digital and analogue clocks to 5 minutes.

This is an **analogue** clock.

Quarter past two. When the minute (long) hand is in the pink it is a 'past' time

Quarter to three. When the minute hand is in the blue it is a 'to' time

Tell the time using digital and analogue clocks to 5 minutes.

6:20 This is a **digital** clock. This shows us digital time - just digits, no hands.

2:15 We can just say the numbers, **two fifteen...**

2:45 **Two forty five.**

Tell the time using digital and analogue clocks to 5 minutes.

How would you read the time on each clock?

6:15 **Six fifteen.**

Quarter past six.

Count round the analogue clock in 5s to check the digital times...

Tell the time using digital and analogue clocks to 5 minutes.

How would you read the time on each clock?

5:45 **Five forty-five.**



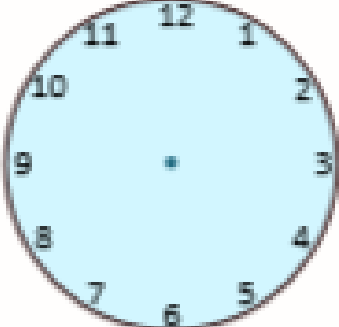
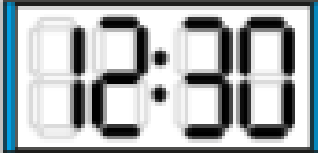
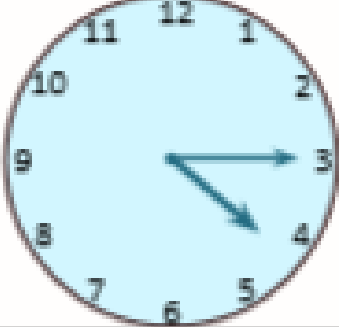





Quarter to six.


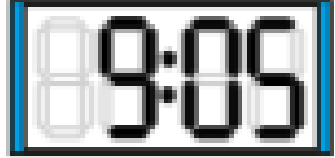
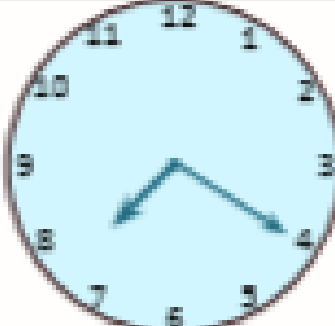

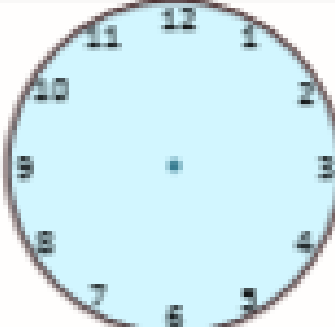

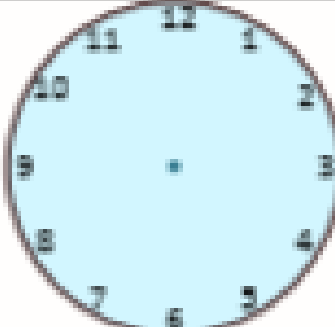



We don't say '45 minutes past 5' as this is a blue/to time. It's quarter to 6 - even though we say the 6 in analogue time, it isn't 6 o'clock yet.

Complete the activity on the following to two pages.

1. Draw the hands on the clock, complete the digital display or write the time in words to complete three sets of matching times.
2. Then cut up the cards and turn over. Play a memory trios game against the clock and see if you can find all three matching cards in ten mins, seven mins and even five mins.

Don't forget to send us pictures of your work on the Year Two email!

		
		
		
		<p>8 o'clock</p>
		

		
		<p>20 past 7</p>
		<p>25 past 2</p>
		
		<p>5 past 10</p>