




## Home Learning Activities

### Year 2, Maths Odd and Even Numbers – Activity 1



Watch <https://www.bbc.co.uk/bitesize/topics/zknsgk7/articles/zt4jj6f>

Remind yourself about odd and even numbers by playing the game on bitesize along with the above video.

Imagine you have met an alien from outer space. Can you write an explanation to tell them what odd and even numbers are and how you can tell them apart?


Circle the **greatest even** number.

14   86   21   93

Circle the **smallest odd** number.

71   52   46   39

Write the **odd numbers between**

20	30
----	----

Write the **even numbers between**

15	25
----	----

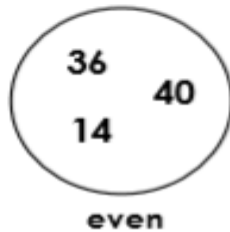
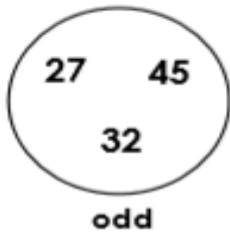
Write the **even numbers between**

55	72
----	----

1. Circle all the even numbers.

33                      18                      41  
                             46                      24  
 20                      15                      37


2. True or false? These numbers are correctly sorted.



3. Sort the balls into the correct boxes.



4. Is the amount shown odd or even?



odd

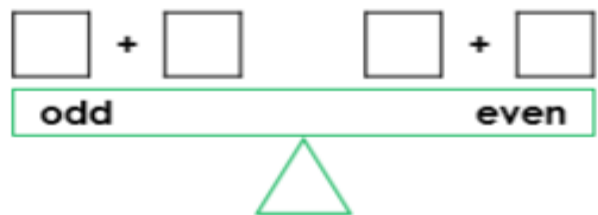
even

5. Clara rolls two dice and adds the numbers together.



Her answer is an odd number between 4 and 10. Write three possible addition calculations.

6. Choose the correct numbers to balance the scales.



7. Kamron and Helen have 45 pens. Who is correct? Convince me.



We have an odd amount of pens.



We have an even amount of pens.